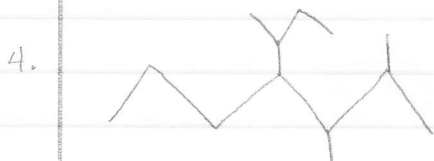
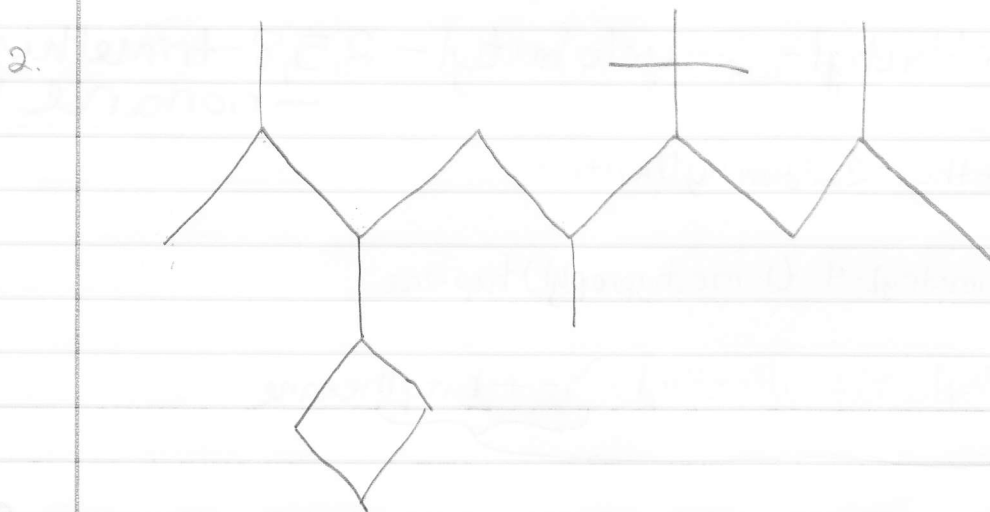




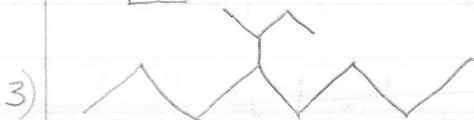
DRAW ME:

- 1) (1-methylethyl) cyclohexane
- 2) (2-methylpropyl) cyclopentane
- ✓ 3) ~~4-secbutyl octane~~ 3-methyl-4-propyloctane
- ✓ 4) ~~2-ethyl-4-isopropyl-2,5-dimethyl heptane~~
5-isopropyl-3,3,4-trimethyloctane
- 5) 3,3-dimethyl-5-(1-methylethyl) octane.

Name Me:



Answers:



Name:

1) ~~7-sec-butyl-2,8-diethyl-4-isopropyldecane~~

2. 6-tertbutyl-3-cyclobutyl-2,5,8-trimethyl-
-nonane

3. 3-ethyl-2,2-dimethylheptane

4. 2,3-dimethyl-4-(1-methylpropyl) heptane

5. 4-ethyl-2,2-dimethyl-3-tert-butylhexane

4-sec-butyl-3-ethyl-7-isopropyl-9-methyl
undecane