


Cyclo names

Draw me:

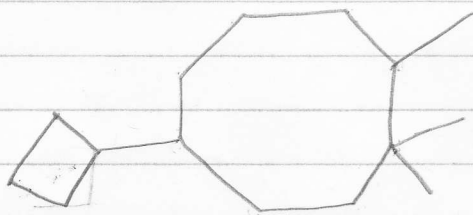
- ① β -isopropyl-3-methylcyclopentane
- ② 2,2,5-trimethyl-4-(1-methylpropyl)octane
- ③ t-butylcyclopentane
- ④ 5-methyl-4-(1-methylethyl)nonane
- ⑤ 3-cyclopropyl-5-ethylheptane

Name me:

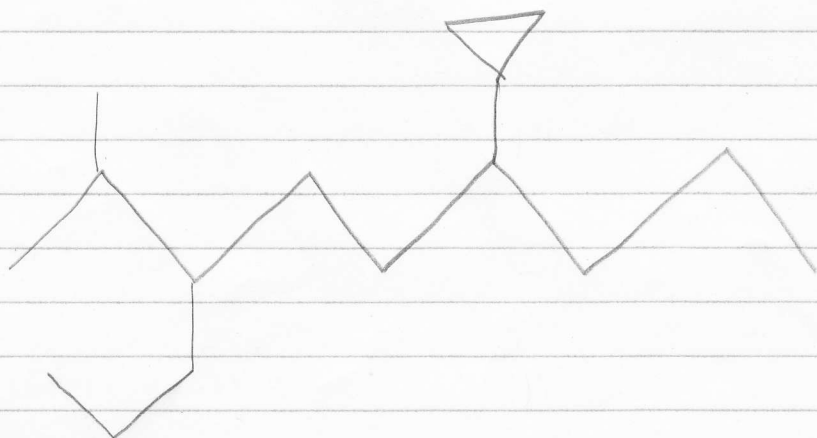
⑥



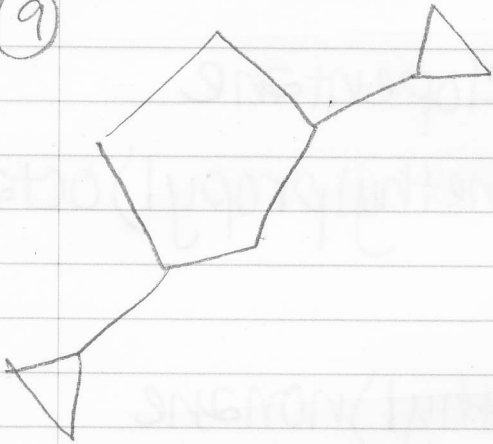
⑦




⑧



9)



10)



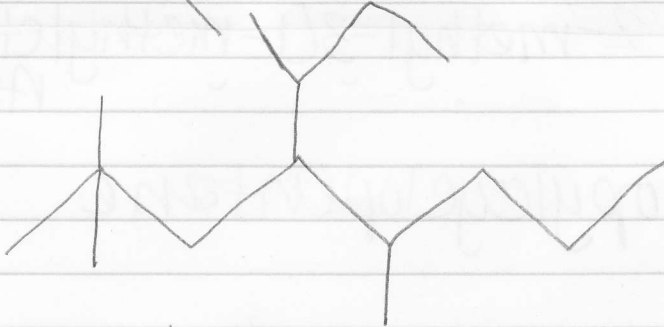
Cyclonames

Answers:

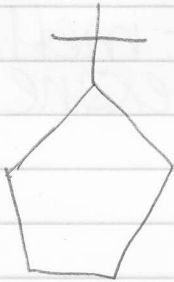
①



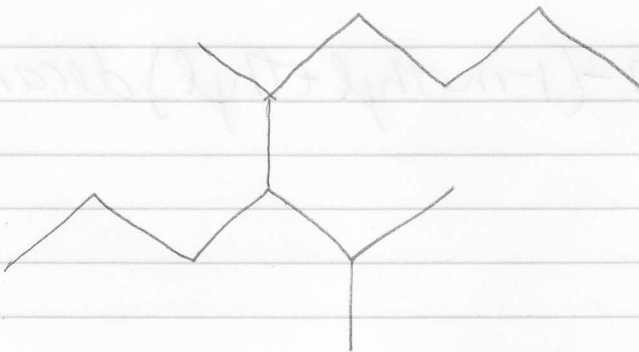
②



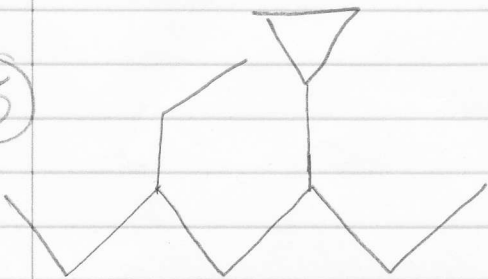
③



④



⑤



✓ ⑥ ~~3,6-diisopropyl-4,4-dimethyloctane~~
3-ethyl-6-isopropyl-2,4-dimethyloctane

✓ ⑦ ~~5-cyclobutyl-1,1,2-trimethylcyclooctane~~

✓ ⑧ ~~6-cyclopropyl-2-methyl-3(1-methylethyl)~~
nonane

✓ ⑨ 1,3-dicyclopropylcyclopentane

✓ ⑩ ~~3-t-butyl-1-cyclopropyl-5-methyl~~
cyclohexane

✓ 4-cyclopropyl-7-(1-methylethyl)decane