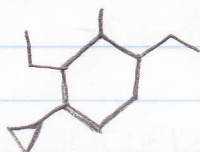


Name Me:

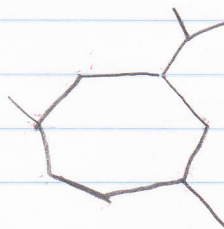
①




②



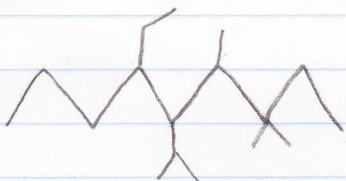
③



④



⑤



DRAW ME:

1. ethylcyclopentane

2. 4-ethyl-1,1-dimethyl-6-(1-methylpropyl)cyclooctane

~~3. 3-ethyl-4,7-dimethyl-6-(1-methylethyl)nonane~~

4. 3-ethyl-2,5-dimethylhexane

~~5. 3,4,5,5-tetramethyloctane~~

3,4,5-trimethyloctane

~~7-ethyl-4-isopropyl-3,6-dimethylnonane~~

ANSWERS

1. 1-cyclopropyl-2,4-diethyl-3-methylcyclohexane
2. 2,4-dimethylhexane
3. 3-isopropyl-1,5-dimethylcyclooctane ~~heptane~~
4. ~~5-(1-ethylpropyl)-4,8,9-trimethylundecane~~
5. 6-ethyl-5-isopropyl-3,3,4-trimethylnonane

4. 7-(1-ethylpropyl)-3,4,8-trimethylundecane

DRAW

