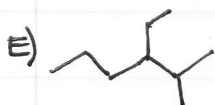
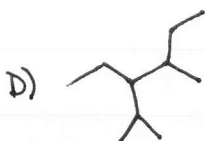

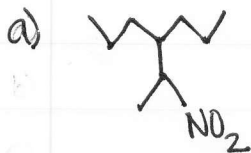


# Orgo Masters

Benjamin Watts (M lab)  
Courtney Steblein (W lab)  
Marc Theodore (W Lab)  
Nekita Patel (M lab)

17/20

NAME THE FOLLOWING



Draw the Following

a) 2-methyl-4-[2-methylpropyl]nonane

b) ~~6-iodo-2,3,5-trimethyl-4propyl heptane~~ *o.k. name*

c) 3-ethyl-6,6-dimethylnonane

d) 4-ethyl-2-methylheptane

e) ~~2-(1-methylethyl)pentane~~ 2,3-dimethylhexane

Orgo Masters  
 Benjamin Watts (M Lab)  
 Courtney Steblein (W Lab)  
 Marc Theodore (W Lab)  
 Nekita Patel (M Lab)

ANSWER  
 PAGE

NAME Following Answers

- a) 4-[1-Nitroethyl]heptane
- b) ~~4~~-Ethyl-~~2~~-Fluorononane
- c) 6-(1-iodoethyl)-4-isopropyldecane

OR

6-(1-iodoethyl)-4-(1-methylethyl)decane

d) 3-ethyl-2,4-dimethylhexane

e) 2-methyl-3-ethylhexane

3-ethyl-2-methylhexane

Draw Following Answers

