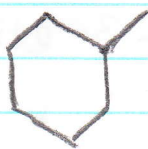
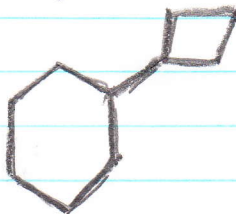


Name me:

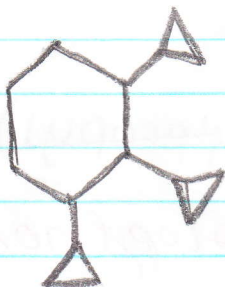
1.)



2.)



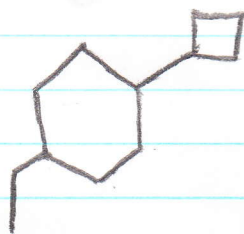
3.)



4.)



5.)



Draw me:

1.)

4-ethyl-2,2-dimethyl-1-propylcyclooctane

2.) 4-(1,1-dimethylethyl)-3-ethyl-5-methylheptane

~~3.) 4-ethyl-6-(2-methylpropyl)nonane~~

6-ethyl-2-methyl-4-propylnonane

4.) 2,2-dimethyl-4-isopropylheptane


5.) cyclopentylcyclohexane

Name Me


1. methyl cyclohexane
2. cyclobutyl cyclohexane
- ✓ 3. 1,2,3-<sup>tri</sup>cyclopropyl cyclohexane
4. 3-ethyl-1,1-dimethyl 1 cyclopentane
5. 1-cyclobutyl-4-ethyl cyclohexane

Draw Me

1.



✓ 2.



3.



4.



5.

