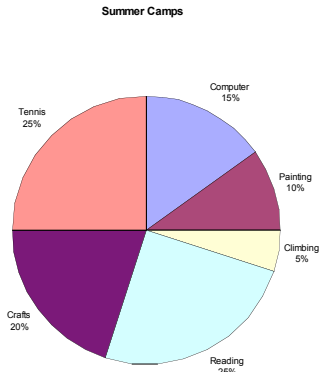


QUICK REVIEW: CLAST SKILL I.D.1

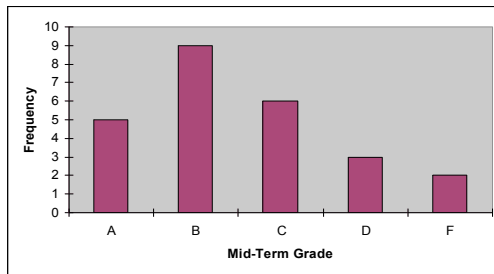
Identified information contained in graphs

1. The circle graph below represents the percentages of summer camps for selected activities at a small town last year. If there were 4,000 children in that town last year, how many of them were participating in the reading camps?



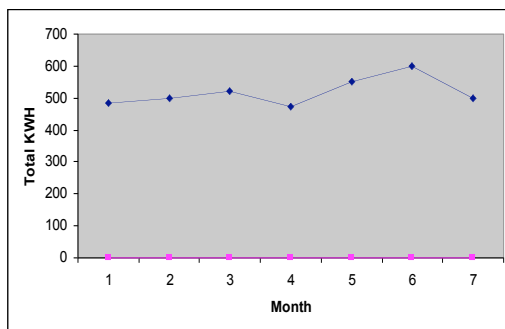
- a) 2,500 b) 1,000 c) 1,500 d) 2,000

2. The bar graph below shows the distribution of grades in a Statistics class last semester. There were 25 students in that class. What percent of students had grades “A” or “B” in that class?



- a) 36% b) 20% c) 14% d) 56%

3. The line graph below represents the total KWH consumed at a one bedroom apartment for seven months at Florida. Roughly how much more KWH consumed in Month 6 than in Month 2?



- a) 600 KWH b) 100 KWH c) 200 KWH d) 400 KWH